

Angles - Bigger or smaller than a right angle?

Use your right angle checker to label the angles 1-15 as bigger than, smaller than or right angles.

1)



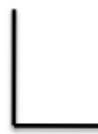
2)



3)



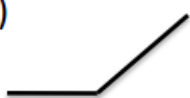
4)



5)



6)



7)



8)



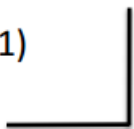
9)



10)



11)



12)



13)



14)

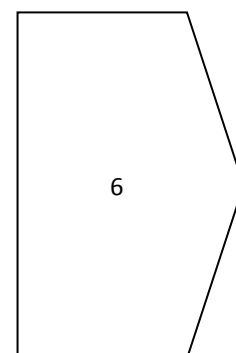
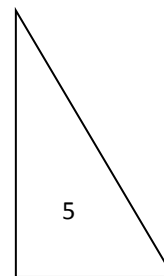
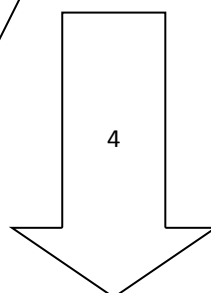
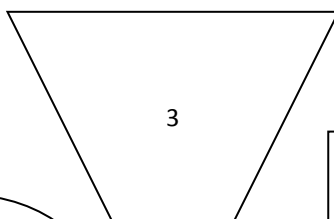
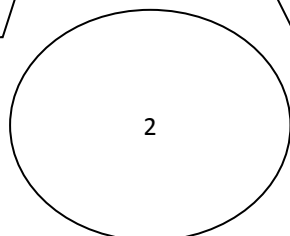
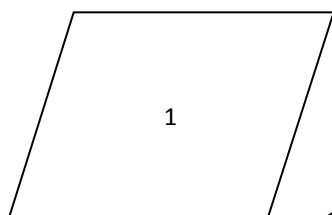


15)



Next, use your right angle checker to find how many of each type of angle there is in the shapes below.

Number of shape	Angles		
	Right angles	Bigger than a right angle	Smaller than a right angle
1			
2			
3			
4			
5			
6			



Angles - acute, obtuse or right angles?

Use your right angle checker to label the angles 1-15 as acute, obtuse or right angles.

1)



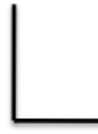
2)



3)



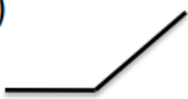
4)



5)



6)



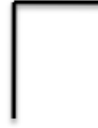
7)



8)



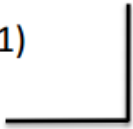
9)



10)



11)



12)



13)



14)

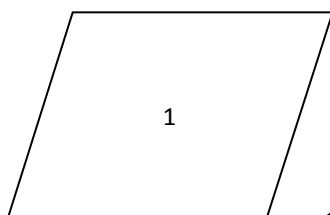


15)

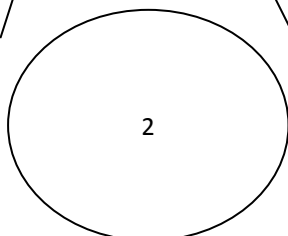


Number of shape	Angles		
	Right angles	Obtuse	Acute
1			
2			
3			
4			
5			
6			

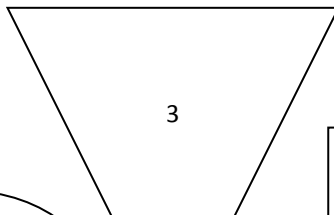
Next, use your right angle checker to find how many of each type of angle there is in the shapes below.



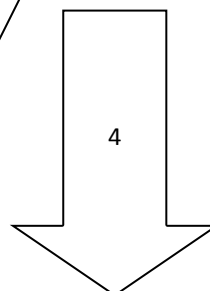
1



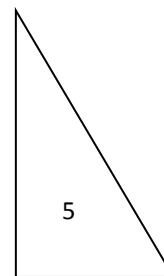
2



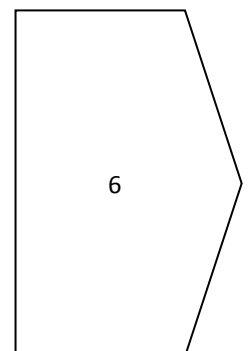
3



4



5



6